
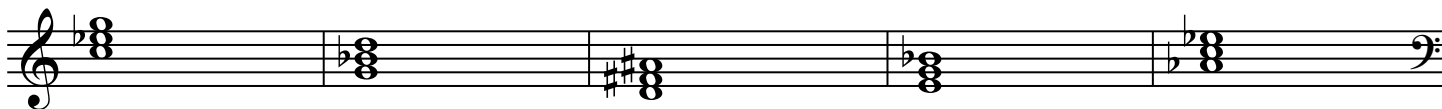



# TRIADS WORKSHEET

COVER THE ANSWERS BELOW.

Identify each triad as Major (M), minor (m), Augmented (A), or diminished (d):



Answers:

Treble Clef: M M m M M  
              m m A d M

Bass Clef: d m M M A  
            m M d d A